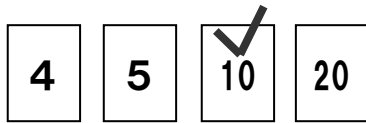
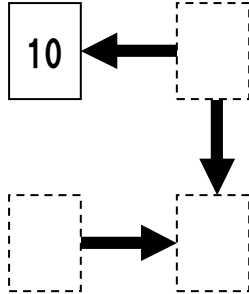


倍数リンク

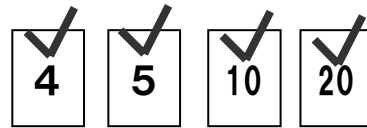
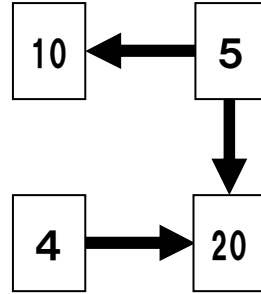
点線でかこまれた所に「数字カード」を置いてください

・カードからのびる矢印の先にはそのカードの倍数が入ります

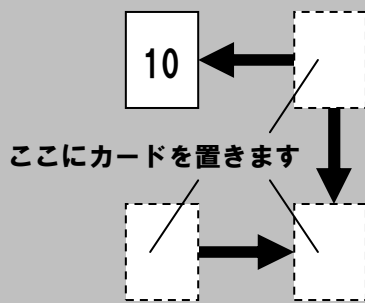
【例題】



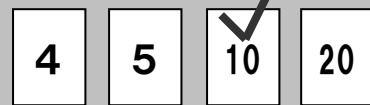
【解答】



点線でかこまれた所に「数字カード」を置いてください



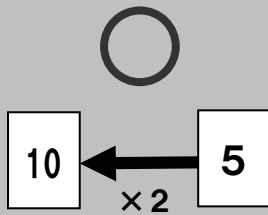
数字カード



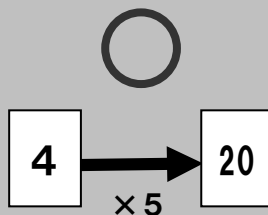
- ・10のカードはもう使われています
- ・おなじカードは一回しか使えません

！注意！ 全部のカードを使わない問題もあります

カードからのびる矢印の先にはそのカードの倍数が入ります

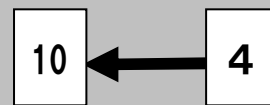


・10は5の倍数



・20は4の倍数

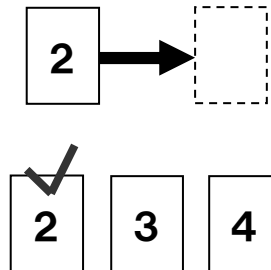
× ダメな例



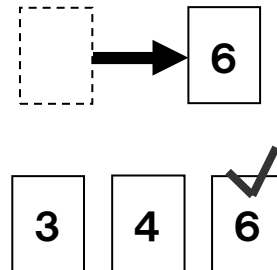
・10は4の倍数でない

倍数リンク

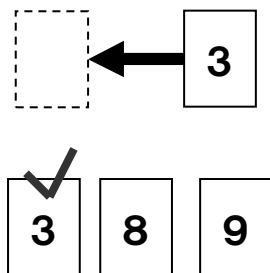
(1)



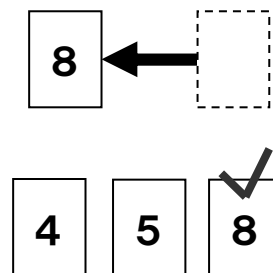
(2)



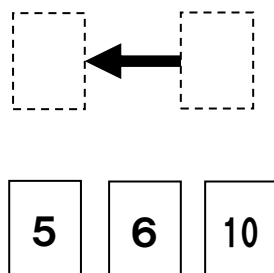
(3)



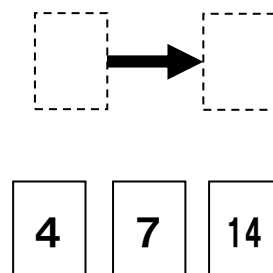
(4)



(5)

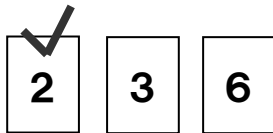
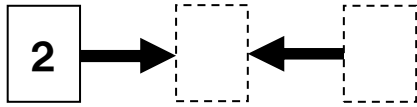


(6)

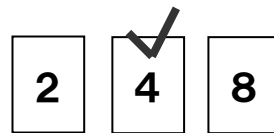
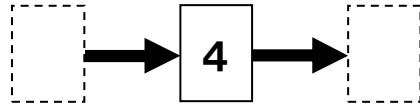


倍数リンク


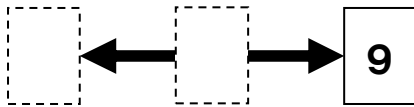
(7)



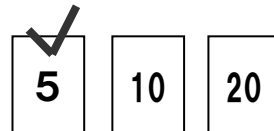
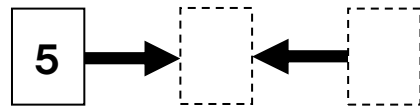
(8)



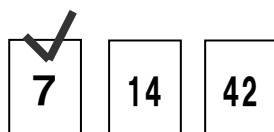
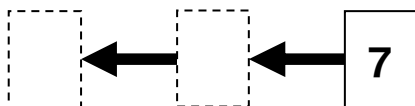
(9)




(10)



(11)

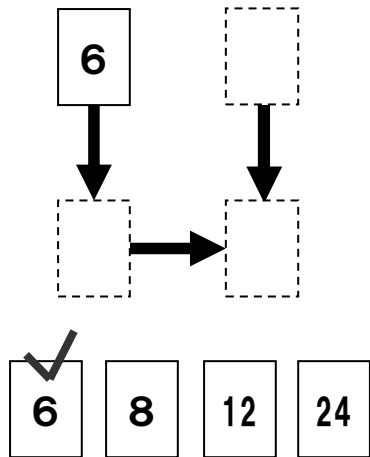


(12)

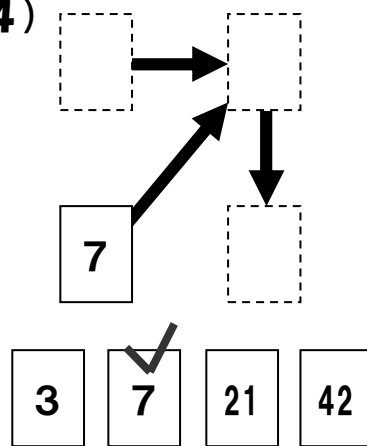


倍数リンク

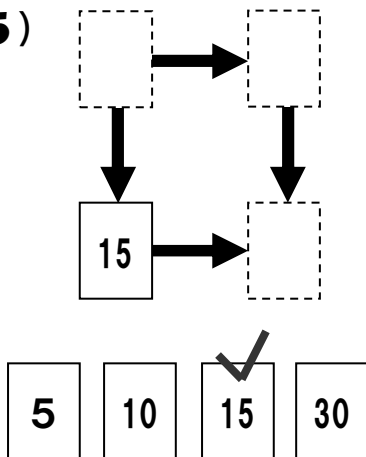
(13)



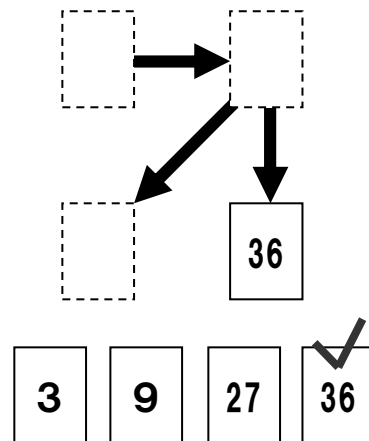
(14)



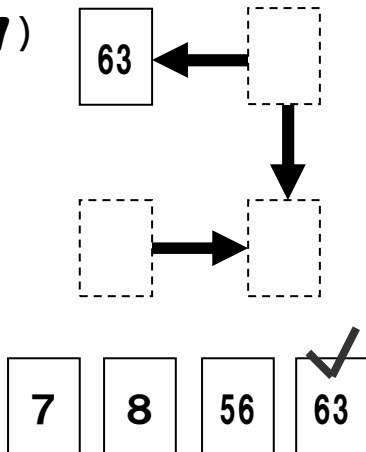
(15)



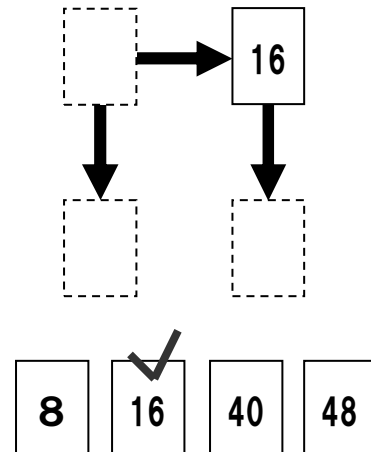
(16)



(17)

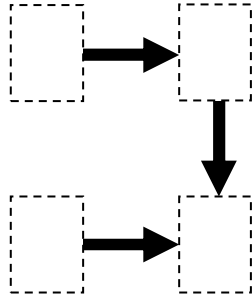


(18)



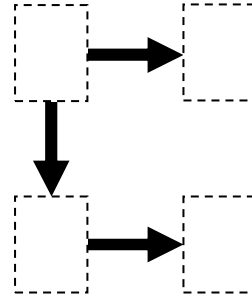
倍数リンク

(19)



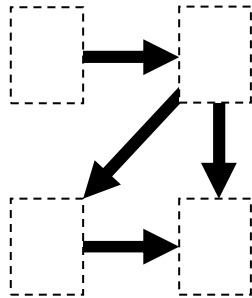
5	8	20	40
---	---	----	----

(20)



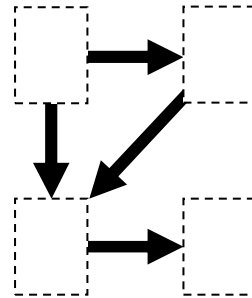
3	12	27	36
---	----	----	----

(21)



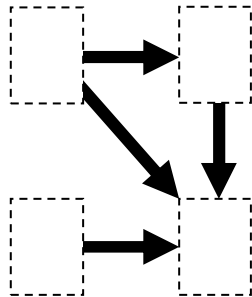
8	16	32	64
---	----	----	----

(22)



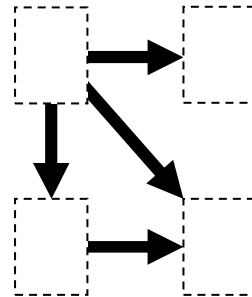
9	18	36	72
---	----	----	----

(23)



6	8	36	72
---	---	----	----

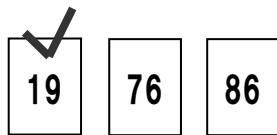
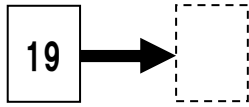
(24)



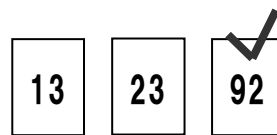
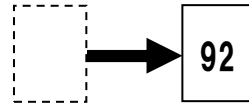
7	14	42	49
---	----	----	----

倍数リンク

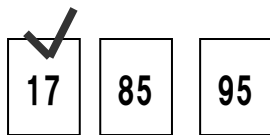
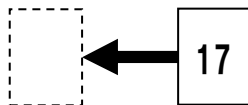
(25)




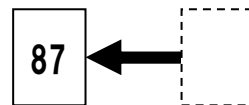
(26)




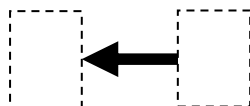
(27)




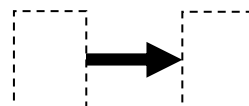
(28)



(29)

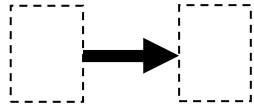


(30)

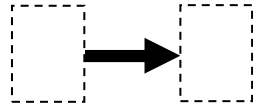


倍数リンク

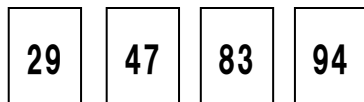
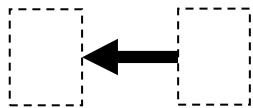
(31)



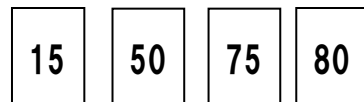
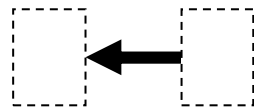
(32)



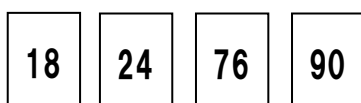
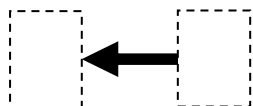
(33)



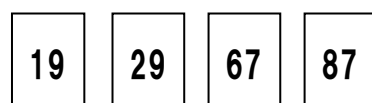
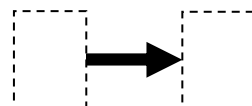
(34)



(35)

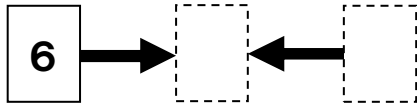


(36)



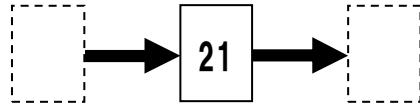
倍数リンク

(37)



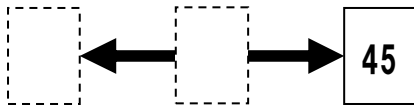
- 6 10 20 30

(38)



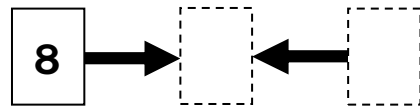
- 7 21 49 63

(39)



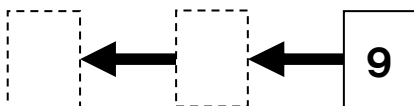
- 15 35 45 60

(40)



- 8 16 24 32

(41)



- 9 27 54 72

(42)



- 12 16 84 96